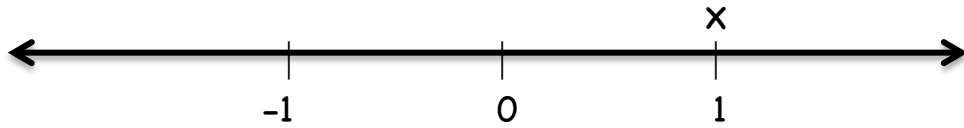


## Algebra on the Number Line

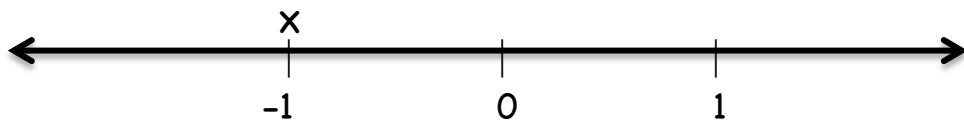
Each card shows the representation of a number  $x$  on the number line.  
For each case, place the following numbers on that number line:

1)  $-x$    2)  $1/x$    3)  $x^2$    4)  $|x|$    5)  $\sqrt{x}$

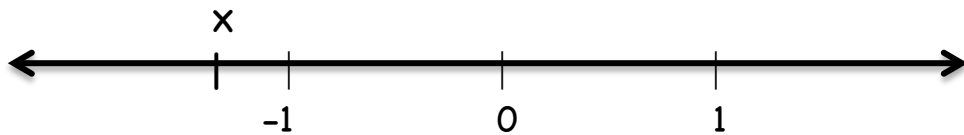
a)



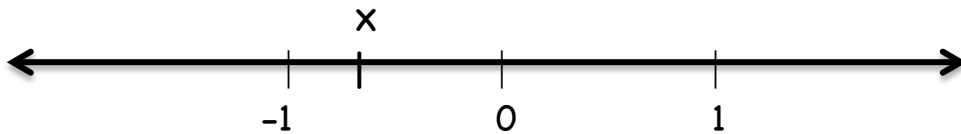
b)



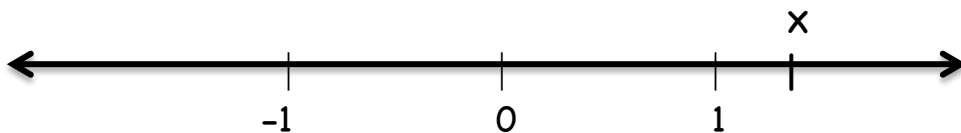
c)



d)



e)



f)

